


Entry Test A

Name:	
Class:	Date:

ANSWER

ANSWER

1 Count the dots.



2 Write these numbers in order.

10 4 7

3 1 more than 8 is

4 1 less than 10 is

5 $7 + 3 =$

6 $4 + \square = 10$

7 Write the missing numbers.

5 6 7

8 Write the missing numbers.

0 5 20

9 $4 + 6 =$

10 $7 + \square = 9$

11 $8 - 3 =$

12 $7 - \square = 4$

13 Draw a triangle.

14 Draw a line longer than this line.



Draw a line shorter than the printed line above.

15 Here are some vegetables.



Carrots

Sprouts


Leeks

(a) How many more carrots than leeks are there?

(b) How many fewer sprouts than leeks are there?

ANSWER

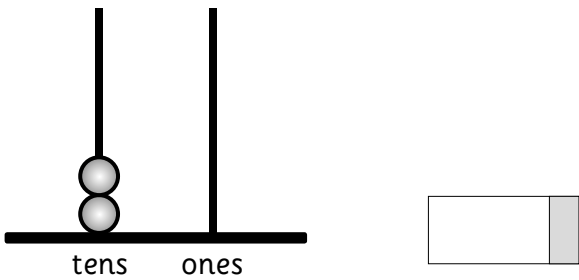
16 Count the spots.



17 Write these numbers in order.

14 17 11

18 Write the number.



19 $10 + 4 =$

20 $15 - 1 =$

21 50 add 10 equals

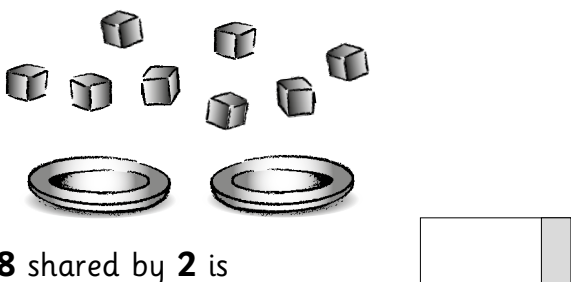
22 40 subtract 10 leaves

23 What is 9 add 9?

24 Continue the pattern.

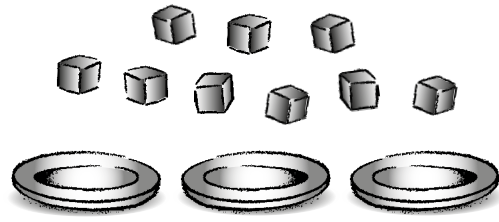
0 10 20 ■ ■

25 Use the pictures to help you.



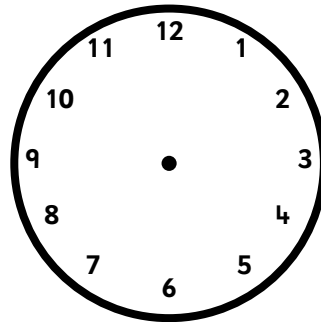
8 shared by 2 is

ANSWER




26 9 shared by 3 is

27 Draw the hands to show the time.

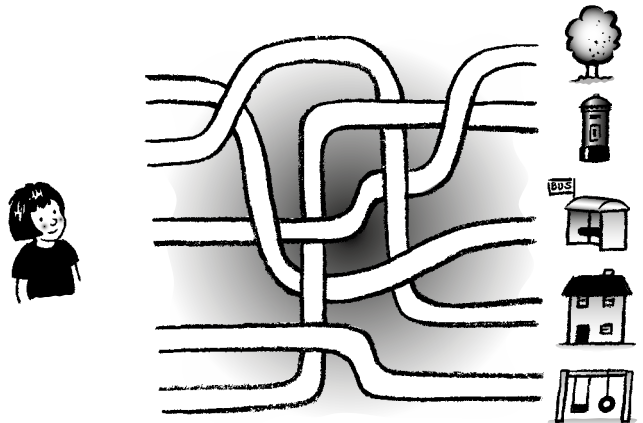


6 o'clock

28 Tick the heavier one.



29 Freya needs to go straight home. Draw a line to show which path she should choose.



ANSWER

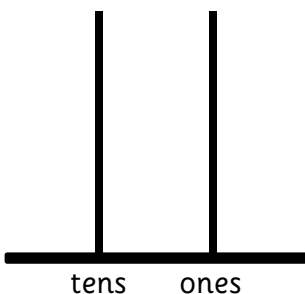
30 Tick the thing that can turn.



31 Write all the missing numbers.

13 18

32 Show 15 on this abacus.



33 1 more than 14 is

34 1 less than 18 is

35 $9 + 4 =$

36 7 and 5 equals

37 3 more than 6 is


38 The difference between 8 and 2 is

39 I spend 6p. What is my change from 20p?

 p

40 Double 9 is

ANSWER



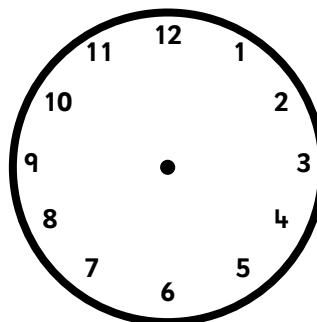
41 (a) 12 shared by 3 is

 (a)


(b) 12 shared by 2 is

 (b)

42 Draw the hands to show half past 3.



43 Put a tick on the right-hand top corner of this square.



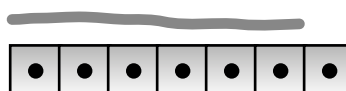
Now draw a line to cut the square in half.

44 Write the numbers into the space where they belong.

1 2 3 4 5 6 7 8 9 10

An even number	An odd number
<input type="text"/>	<input type="text"/>

45 How many blocks long is the string?


 blocks