



Section 1 Session 3

A

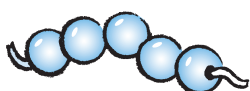
1 Count how many. Write the number.







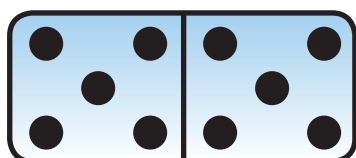
2 Count the beads. Write the number that is 1 more.



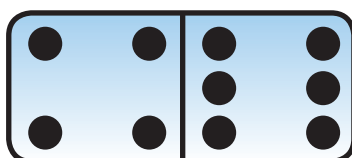




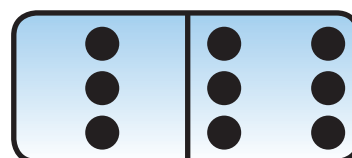
3 Write the total.



$$5 + 5 = \square$$



$$4 + 6 = \square$$




$$3 + 6 = \square$$

B

4 Count the dots. Write the number.

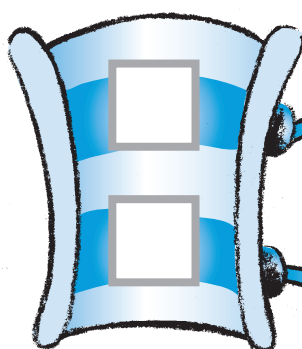






5 Write the missing numbers.

1 less




8

9

1 more



6 Draw a line to join stars which make a total of 10.



C

7 Count these. Write the number.



8 Write the answers.

1 more than 6 is

1 less than 10 is

9 Write how many more to make 10.









