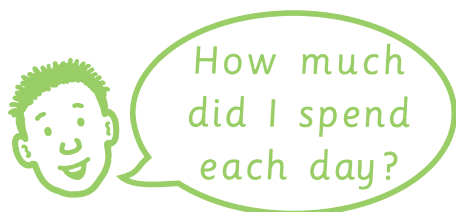



At the Sweet Shop



Write the numbers in the boxes.




On
Monday
I spent

$$\boxed{2}_p + \boxed{1}_p = \boxed{3}_p$$



On
Tuesday
I spent

$$\boxed{}_p + \boxed{}_p = \boxed{}_p$$



On
Wednesday
I spent

$$\boxed{}_p + \boxed{}_p = \boxed{}_p$$



On
Thursday
I spent

$$\boxed{}_p + \boxed{}_p = \boxed{}_p$$



On
Friday
I spent

$$\boxed{}_p + \boxed{}_p = \boxed{}_p$$



On
Saturday
I spent

$$\boxed{}_p + \boxed{}_p = \boxed{}_p$$