


How Many Altogether?


Jade is hunting minibeasts.
How many has she found?
Write the numbers in the boxes.



4 bees are on a flower.
5 bees are in the air.

How many bees
altogether?

bees



6 ladybirds are on a leaf.
4 ladybirds crawl up the stem.
How many ladybirds

altogether?

ladybirds



4 beetles are on a stone.
3 beetles are on the path.
How many beetles

altogether?


beetles



5 butterflies are flying.
2 butterflies are resting.
How many butterflies

altogether?

butterflies



6 snails are on a wall.
2 snails are on the grass.
How many snails

altogether?

snails



3 worms are on the grass.
6 worms are underground.
How many worms

altogether?

worms