


# Activity Time


I played water polo for half an hour.



Jack started at 12 o'clock.  
What time did he finish?

---


We set off at 4 o'clock.



Debjani rode for 1 hour.  
What time did she finish?

---


I rode for 2 hours.



Mark set off at 10 o'clock.  
What time did he get home?

---


I danced for half an hour.



Emily went to ballet at 7 o'clock.  
What time did she finish?

---


The match lasted 2 hours.



The match began at half past nine.  
What time did the match end?

---

I started at 2 o'clock.



Rocco went roller-blading for  $1\frac{1}{2}$  hours.  
What time did he finish?

---