

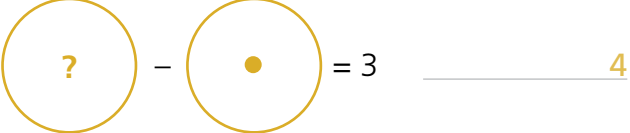


SECTION 1 | Test 1

A Answer

1  $6 + 1 = 7$


2  $7 - 1 = 6$

3  $? - 1 = 3$ 4

4  $5p + 1p = 6p$

5  $10p - 1p = 9p$

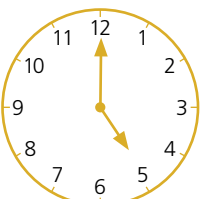
6  $? - 1p = 4p$ 5p

7  Write the name of this shape. square

8 Which pencil is longer? A



9 Which day comes after Tuesday? Wednesday

10  What time is it? 5 o'clock

B Answer

1 $4 + 1 = 5$

2 $14 + 1 = 15$

3 $24 + 1 = 25$

4 $14, 15, 16, 17, \blacksquare$ 18

5 $7 - 1 = 6$

6 $17 - 1 = 16$

7 $27 - 1 = 26$

8 $27, 26, 25, 24, \blacksquare$ 23

9 $\blacksquare + 1 = 4$ 3

10 $\blacksquare - 1 = 8$ 9

C Answer

1 Add 7 and 1. 8

2 Take 1 from 5. 4

3 The total of 8 and 1 is 9

4 The difference between 1 and 6 is 5

5 The sum of 1 and 9 is 10

6 3 is 1 more than 2

7 Subtract 1 from 9. 8

8 4 minus 1 is 3

9 1 less than 8 is 7

10 1 plus 6 is 7