
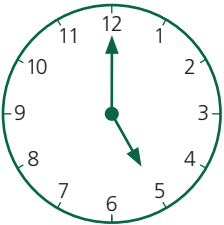



**A** **Answer**

- 1 Count the sticks. How many? \_\_\_\_\_ 7  

- 2  $3 + 6 =$  \_\_\_\_\_ 9
- 3  $7 - 2 =$  \_\_\_\_\_ 5
- 4  $5p + 2p + 1p =$  \_\_\_\_\_ 8p
- 5  $9p - 6p =$  \_\_\_\_\_ 3p
- 6  $8 = 5 + \blacksquare$  \_\_\_\_\_ 3
- 7  $4 \times 1 =$  \_\_\_\_\_ 4
- 8  $5 = 9 - \blacksquare$  \_\_\_\_\_ 4
- 9  $2 + 2 + 2 + 2 =$  \_\_\_\_\_ 8
- 10  What time is it? \_\_\_\_\_ 5 o'clock


**B** **Answer**

- 1 Find the total number of dots. \_\_\_\_\_ 7  

- 2 Take 0 from 7. \_\_\_\_\_ 7
- 3 Write the word for the missing number.  
 $3, 5, \blacksquare, 9$  \_\_\_\_\_ seven
- 4 Four more than five \_\_\_\_\_ 9
- 5 How many must be taken from 5 to leave 3? \_\_\_\_\_ 2
- 6 To eight add zero. \_\_\_\_\_ 8
- 7 What number equals double 2? \_\_\_\_\_ 4
- 8 From 6 subtract 3. \_\_\_\_\_ 3
- 9 Find the difference between 3 and 8. \_\_\_\_\_ 5
- 10 Which of these numbers is an odd number?  


2	4	5	6	8
---	---	---	---	---

\_\_\_\_\_ 5

**C** **Answer**

- 1 Write the word for the number that comes between 6 and 8. \_\_\_\_\_ seven
- 2 Lucy has 7p and she spends 4p. How much has she left? \_\_\_\_\_ 3p
- 3 Which is the shortest line? A, B or C? \_\_\_\_\_ B  

- 4 Jack is 9 years old and Emily is 3 years younger. How old is Emily? \_\_\_\_\_ 6
- 5 By how much is 7p more than 3p? \_\_\_\_\_ 4p
- 6 Anu has one 5p and one 2p. How much are these coins worth altogether? \_\_\_\_\_ 7p
- 7 A line is 6cm long. By how many centimetres is it shorter than another line 8cm long? \_\_\_\_\_ 2cm
- 8 Gita has two 2ps and four 1ps. How much money has she altogether? \_\_\_\_\_ 8p
- 9 Which is the third letter in the row?  

A	B	C	D	E	F	G
---	---	---	---	---	---	---

\_\_\_\_\_ C
- 10  Daniel gets to school 2 hours later than the time on this clock. At what time does he arrive? \_\_\_\_\_ 9 o'clock