







Section 1 Check-up 1

1

1 Count. Write how many.



2 Count. Write how many.



3 Circle the larger number.

5

9

8

4

6

1

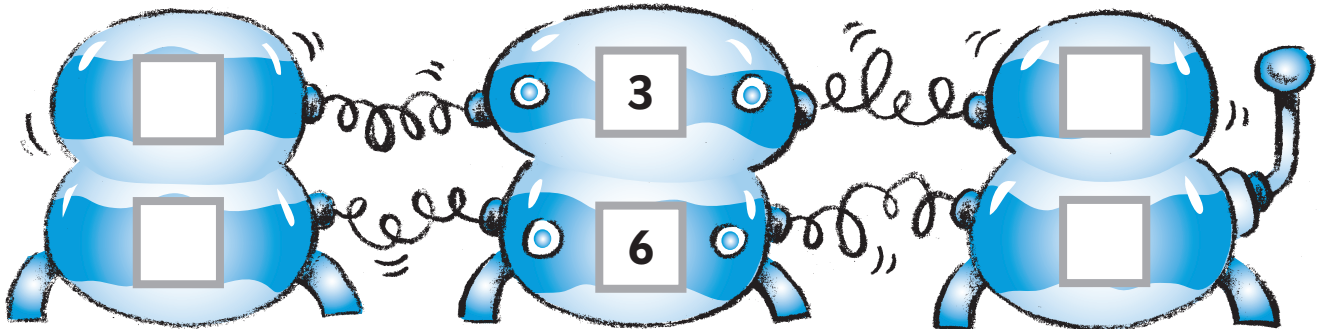
2

10

4 Write the answers.

1 less

1 more



5 Write the answers.

$1 + 4 = \square$

$3 + 2 = \square$

$5 - 1 = \square$

$4 - 3 = \square$

$2 + 2 = \square$

$2 - 2 = \square$