


Section 2 Session 3

A


1 Tick the longer one.



2 Write the answers.



3 Draw a line to show how the cat can get to his basket.




B

4 Look at the picture in question 3.

Draw a rabbit between the cat and the dog.

Draw a hutch between the basket and kennel.

5 Tick the longest.



6 Write the answers.

7 add 3 equals

2 and 4 is equal to

5 subtract 3 leaves

7 minus 4 equals


C

7 Write the answers.

Who is the taller?

How much taller?

bricks



8 Write the answer.

Tilly has 6 grapes. Jay has 5 grapes.

How many grapes do Tilly and Jay have altogether?

9 Look at the picture in question 3.

Draw a line to show how the rabbit can get home.

Do this for the dog.

Draw another way home for the cat. Do this for the rabbit.

