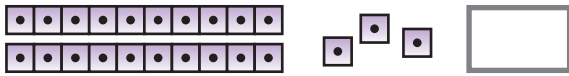
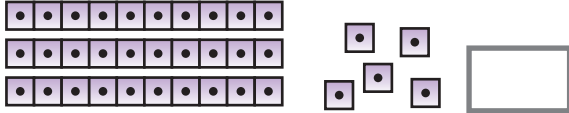


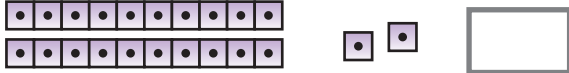
Section 2 Session 1

A ANSWER

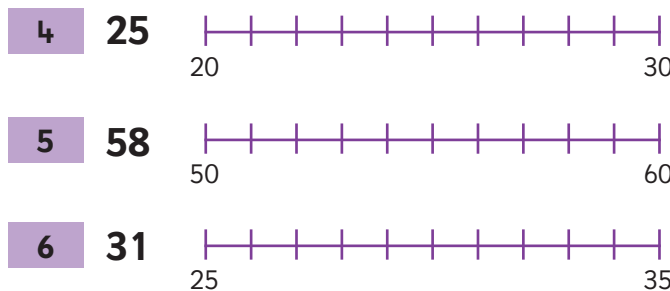
Write how many.

1 




2 




3 




Show where the number belongs.






The numbers show how many doughnuts are in each bag. Find the totals.

7  +  +  =

8  +  +  =

9  +  +  =

10  +  +  =

B ANSWER

1 **23** is tens and ones.

2 **47** is tens and ones.

3 **96** is tens and ones.

Write these in order.

4 **21, 95, 47, 38**

5 **73, 37, 45, 35**

6 **54, 63, 45, 36**

Find the totals.

7 **6 + 3 + 4** =

8 **7 + 7 + 2** =

9 **8 + 2 + 6** =

10 **3 + 4 + 9** =

C ANSWER

1 What number is **9** tens and **5** ones?

2 How many tens in **54**?

3 How many tens in **46 + 4**?



Josh
7 years



Dad
43 years



Alice
19 years



Mum
39 years

Which member of the family is

4 the oldest?

5 the youngest?

6 Write the names of the family in age order. Start with the youngest.

7 How many years older than Josh is Alice?

8 Alice's friend Jack is 2 years older than her. How old is Jack?

9 Josh has two friends, also aged 7. What is the total of all three of their ages?

10 How many years older than Mum is Dad?