

Section 1 Check-up 1

Session Focus



Number

Shape



Word problems

1

1 Count. Write how many.



2 Count. Write how many.



3 Circle the larger number.

5 **9**


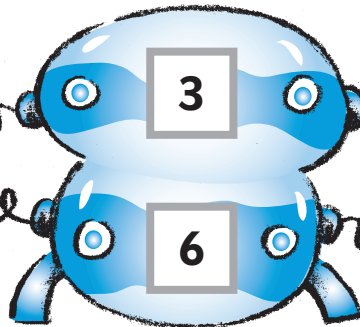
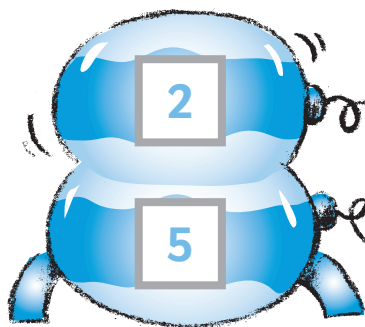
8 4

6 1

2 **10**

4 Write the answers.

1 less



1 more

5 Write the answers.

$$1 + 4 = \boxed{5}$$

$$3 + 2 = \boxed{5}$$

$$5 - 1 = \boxed{4}$$

$$4 - 3 = \boxed{1}$$

$$2 + 2 = \boxed{4}$$

$$2 - 2 = \boxed{0}$$