

Section 2 Session 4

Session Focus

Position, direction and movement

Addition and subtraction


Subtraction of a one-digit from a two-digit number

A

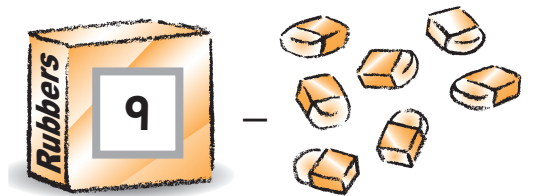
1 Tick things that turn.



2 Write the answers.

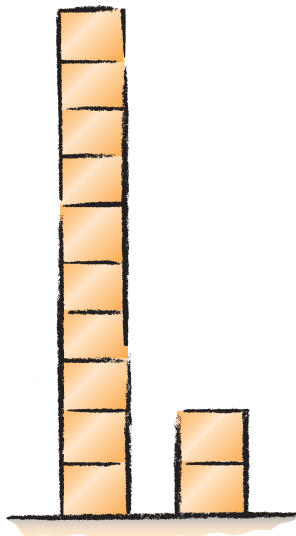


$$3 + 5 = \boxed{8}$$




$$9 - 7 = \boxed{2}$$


3 Write the answers.



$$12 - 2 = \boxed{10}$$



$$19 - 8 = \boxed{11}$$



$$15 - 3 = \boxed{12}$$

B

4 Write the answers.

7 add 4 equals $\boxed{11}$

9 and 2 is $\boxed{11}$

7 take away 3 is $\boxed{4}$


8 minus 3 is $\boxed{5}$

5 Tick, circle or cross the answer.

Put a tick on the right-hand side of the picture.

Put a cross underneath the table.

Put a circle above the chair.



6 Write the answers in words.

eighteen minus seven is

eleven

nineteen subtract four is

fifteen

C

7 Look at the picture for question 5.

Draw a plate on the table.

8 Write the answer.

Harry has  and . Daniel has .

How much have Harry and Daniel in total?

£ 9

9 Write the answer.

There are **18** cows in the field.

The farmer puts **4** of the cows into the barn.

How many cows are left in the field?

14

