


Matrices practice page 1



Which picture on the right best fits into the space in the grid on the left?
Circle the letter. If you get stuck, go back to pages 37 to 39 for some reminders.

1.



A



B



C

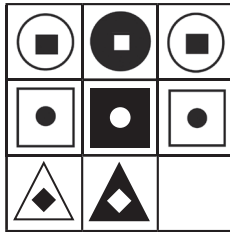


D



E

2.



A



B



C

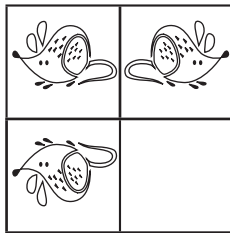


D



E

3.



A



B



C

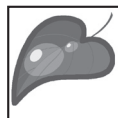
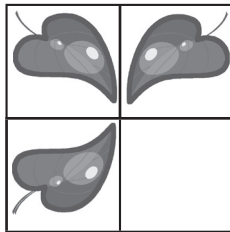


D

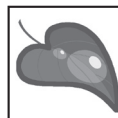


E

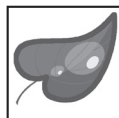
4.



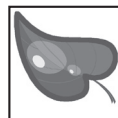
A



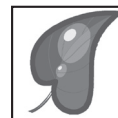
B



C




D



E

5.



A



B



C

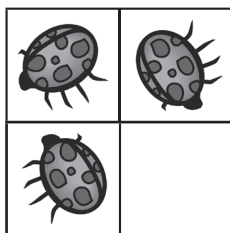


D




E


6.



A




B



C



D



E