


Entry Test A

Name:	
Class:	Date:

ANSWER

ANSWER

1 Count the dots.



2 Write these numbers in order.

10 4 7

3 1 more than **8** is

4 1 less than **10** is

5 **7 + 3 =**

6 **4 + ■ = 10**

7 Write the missing numbers.

5 6 7 ■ ■ ■

8 Write the missing numbers.

0 5 ■ ■ 20

9 **4 + 6 =**

10 **7 + ■ = 9**

11 **8 - 3 =**


12 **7 - ■ = 4**

13 Draw a triangle.


14 Draw a line longer than this line.

Draw a line shorter than the printed line above.

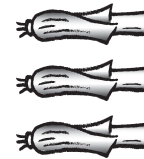
15 Here are some vegetables.



Carrots



Sprouts



Leeks

(a) How many more carrots than leeks are there?

(b) How many fewer sprouts than leeks are there?