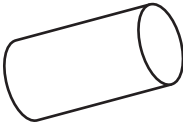
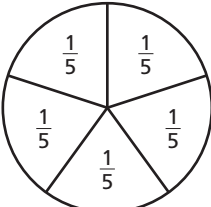



Entry Test A

Name: _____	
Class/Set: _____	Date: _____

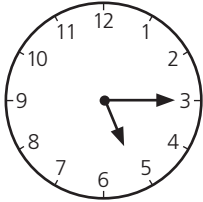
- Answer**
- 1 Increase 6 by 5. _____
- 2 Name the month which is three months after December. _____
- 3 $20p + 30p =$ _____ p
- 4 Write this number in figures.
4 tens 7 units

- 5 $63 - 7 =$ _____
- 6 $4 + 4 + 4 + 4 + 4 + 4 =$ _____ \times _____ $=$ _____
- 7 A square has equal sides and right angles. _____
- 8 Add 30cm to 40cm. _____ cm
- 9 Write the number that is 5 more than 14 minus 9. _____
- 10  Two faces on a cylinder are the same. What shape are they? _____
- 11 How much longer is 1m than 57cm? _____ cm
- 12 How many children chose giraffe as their favourite animal?
 tiger 😊
 giraffe 😊 😊 😊
 monkey 😊 😊
 Two children = 😊
- 13 Write the two missing numbers in this sequence.
0, 8, 16, , 32, , 48

- 14  The circle is one whole one. How many fifths in four whole ones?

- Answer**
- 15 $400 + 70 + 5 =$ _____
- 16 $26 + 78 =$ _____
- 17 What number is added to 306 to make 376? _____
- 18 $£3.00 - £1.80$ £ _____
- 19 How many times smaller is 54 than 540? _____
- 20 28 March is the first day of a holiday which ends on 6 April. How many days? _____
- 21 What fraction of the whole strip is
 a shaded a _____
 b unshaded? b _____
- 
- 22

Scores	
Jay	Emily
22	18
7	13
9	9

How many more did Emily score than Jay? _____
- 23  How many minutes from the time on the clock to ten to six? _____ min
- 24 $\frac{3}{10} + \frac{6}{10} =$ _____
- 25 What is the missing number?
 $\times 6 = 8 \times 3$ _____
- 26 1kg costs 45p. 200g costs p. _____ p