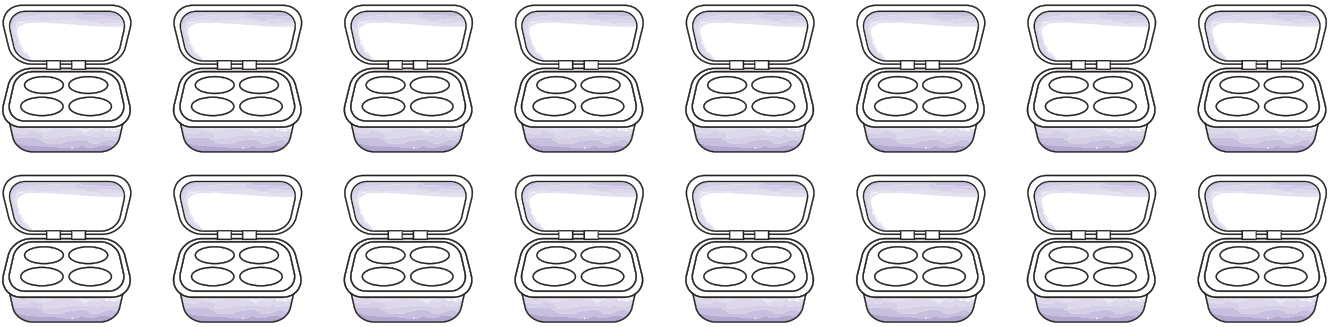


Final test continued

- 8** Write the first **nine** square numbers.

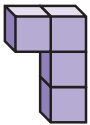
--	--	--	--	--	--	--	--	--

- 9** Be systematic when solving this problem:
This fruit box has spaces for four peaches. Shade **all** the ways that the box could look if **none, one, two, three or four** peaches are in it.

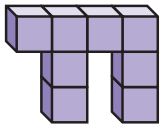


- 10** a Count the number of cubes in each shape. Record the results in the table

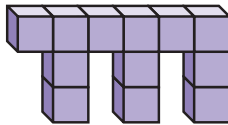
Shape 1



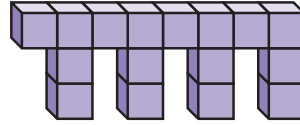
Shape 2



Shape 3



Shape 4



Shape	Cubes

- b** How many cubes will **Shape 10** be made from? _____

- 11** Solve these one-step word problems.

a **66** cars are in the car park. **37** more arrive.
How many cars are there now? _____

b My mum is four times older than me. I am 7.
How old is my mum? _____

- 12** Solve these two-step money problems.

a I had **58p**. I was given **30p** more and then I spent **37p**. How much do I have left? _____

b Six apples cost **72p**. How much does it cost to buy five apples? _____

- 13** Write these amounts correctly using a pound sign and a decimal point.

a five pounds and sixty-eight pence _____

b twelve pounds and four pence _____