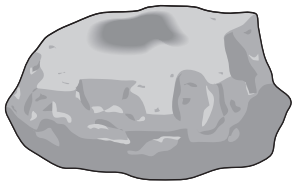


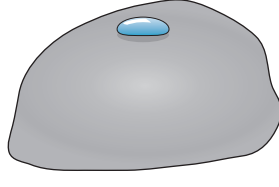
Rocks



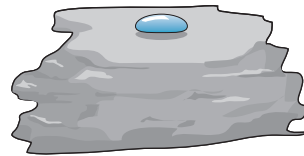
Jamie is testing **rocks** to find out if they are **permeable**. He puts three drops of water on each piece of rock. The diagrams show how they look after 5 minutes.



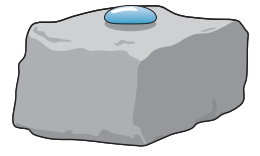
A



B



C



D



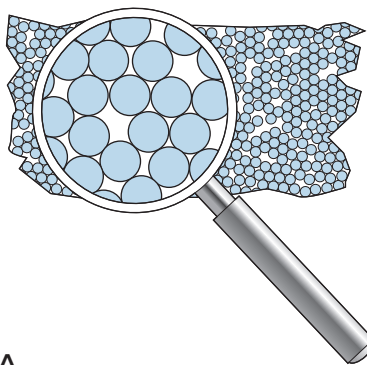
1. a) Which rock in Jamie's experiment has absorbed water? _____

b) What word is used to describe the property of allowing water to run through a rock? _____

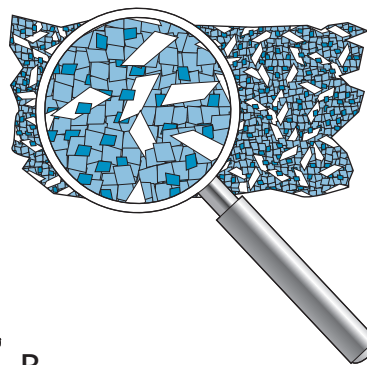
2. Which kinds of rock have **grains** with sharp edges? _____

3. Which rock wears away the easiest? _____


4. These diagrams show what the grains in three different rocks look like. Write the name of the rock under each diagram.



A



B



C

5. Rocks are chosen for their **properties**. Explain which rock you would use for a doorstep that will have lots of people walking on it.

I would use _____ because _____
