


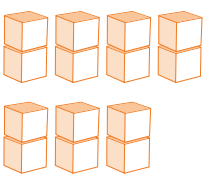





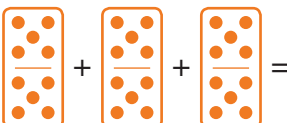





A	Answer
1  =	<u>15</u>
2  $\times 2 =$	<u>4</u>
3  =	<u>20p</u>
4  Write the number of cubes in words.	<u>fourteen</u>
5  =	<u>12</u>
6  =	<u>50p</u>
7 4 sets of 10 =	<u>40</u>
	
8  $\times 10 =$	<u>60</u>
9  $\times 7 =$	<u>35p</u>
10  =	<u>30</u>

B	Answer
1 5, 10, 15, 20, 	<u>25</u>
2 $9 \times 10 =$	<u>90</u>
3 $5 + 5 + 5 + 5 + 5 + 5 =$	<u>30</u>
4 $2p \times 4 =$	<u>8p</u>
5 10,  , 30, 40, 50	<u>20</u>
6 $2 + 2 + 2 + 2 + 2 =$	<u>10</u>
7 Double 9 is	<u>18</u>
8 $8 + 8 =$	<u>16</u>
9 2, 4,  , 8, 10, 12	<u>6</u>
10 $10p \times 8 =$	<u>80p</u>

C	Answer
1 How much are nine 5p coins?	<u>45p</u>
2 8 sets of 5 are	<u>40</u>
3 7 times 10 is	<u>70</u>
4 Ten twos are	<u>20</u>
5 What are two groups of 5?	<u>10</u>
6 2 lots of 6 is	<u>12</u>
7 5 plus 5 plus 5 is	<u>15</u>
8 A sweet costs 5p. How much do 10 sweets cost?	<u>50p</u>
9 Multiply 10 by 10.	<u>100</u>
10 Sam is given £5 each week for 5 weeks. How much does she have now?	<u>£25</u>