

Check-up test 2

1 What is $\frac{1}{4}$ of 8? 2

1 mark

2 Here are 12 hats.
How many is one-quarter of the set? 3

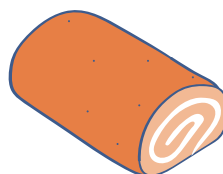


1 mark

3 A dance class has 24 children.
 $\frac{1}{4}$ of them are boys. How many are boys? 6

1 mark

4 How many equal pieces should this cake be cut into to give thirds? 3

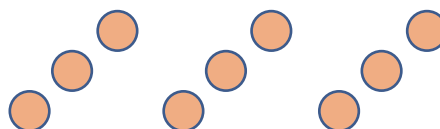


1 mark

5 Lucy and Finn have a whole cake. Lucy eats one-third of the cake. Finn eats one-third of the cake. Write a fraction to show how much of the cake is not eaten. $\frac{1}{3}$

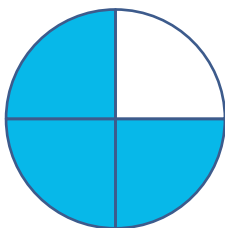
1 mark

6 How many counters are there in $\frac{1}{3}$ of this set? 3



1 mark

7 Colour $\frac{3}{4}$ of the circle.




1 mark

8 What fraction of these buttons are white? $\frac{1}{4}$



1 mark

9 Colour $\frac{3}{4}$ of the 20 squares in this grid.



1 mark

10 What is $\frac{2}{4}$ of 8p? 4 p



1 mark