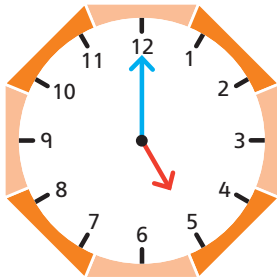


O'clock: tell the time


2 Draw lines to match each clock to the correct time.



It is 11 o'clock.




It is 3 o'clock.



It is 5 o'clock.

3 Read each clock and write the time below the picture.



It is _____.



It is _____.