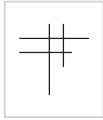
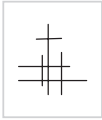
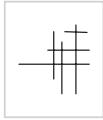
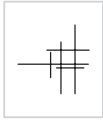
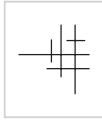
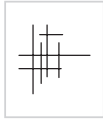
















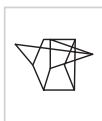


















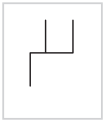


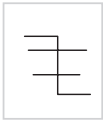
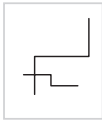
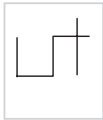
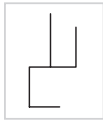








**Q. 11–15** Hidden pictures

In which picture on the right is the picture on the left hidden? Circle the letter.

<b>11</b>							11 <input type="checkbox"/>
		<b>a</b>	<b>b</b>	<b>c</b>	<b>d</b>	<b>e</b>	
<b>12</b>							12 <input type="checkbox"/>
		<b>a</b>	<b>b</b>	<b>c</b>	<b>d</b>	<b>e</b>	
<b>13</b>							13 <input type="checkbox"/>
		<b>a</b>	<b>b</b>	<b>c</b>	<b>d</b>	<b>e</b>	
<b>14</b>							14 <input type="checkbox"/>
		<b>a</b>	<b>b</b>	<b>c</b>	<b>d</b>	<b>e</b>	
<b>15</b>							15 <input type="checkbox"/>
		<b>a</b>	<b>b</b>	<b>c</b>	<b>d</b>	<b>e</b>	

**Q. 16–20** Analogies

Which of the five pictures on the right goes with the third one to make a pair like the two on the left? Circle the letter.

<b>16</b>		is to		as		is to						16 <input type="checkbox"/>
							<b>a</b>	<b>b</b>	<b>c</b>	<b>d</b>	<b>e</b>	
<b>17</b>		is to		as		is to						17 <input type="checkbox"/>
							<b>a</b>	<b>b</b>	<b>c</b>	<b>d</b>	<b>e</b>	
<b>18</b>		is to		as		is to						18 <input type="checkbox"/>
							<b>a</b>	<b>b</b>	<b>c</b>	<b>d</b>	<b>e</b>	