

Test 11: Number and place value

1 Here are the beginnings of some number sequences.
The number **100** will appear in **two** of the sequences. Tick them.




0, 2, 4, 6, 8, 10 ...

0, 5, 10, 15, 20, 25 ...

0, 3, 6, 9, 12, 15 ...

1 mark

2 Here are some number cards.



Write all the **2-digit** numbers between **10** and **20** that can be made using these digits.

.....

1 mark

3 Only **one** of these number sentences is correct. Tick it.

a) 4 tens and 2 ones < 2 tens 13 ones

b) 2 tens and 3 ones > 1 ten 14 ones

c) 2 tens and 2 ones = 1 ten 12 ones

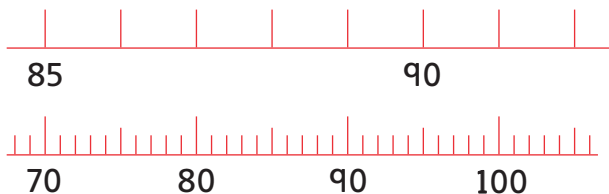
1 mark

4 Write the missing numbers to complete this sentence.

In the number 53, there are tens and ones.

1 mark

5 Draw a cross to show number **92** on each of the number lines below.



1 mark