

# Test 19: Mixed

1 Here are some signs.

> < =

Write the correct sign in each box.

$10 \div 5$    $10 - 5$      $10 \times 5$    $5 + 5 + 5 + 5 + 5$

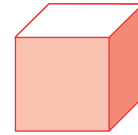
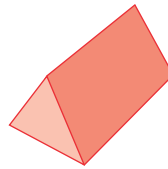
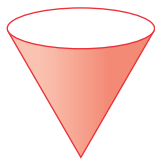
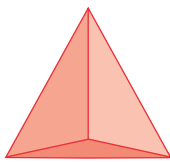
1 mark

2 Write the missing numbers in the boxes.



2 marks

3 Tick the shape with exactly six vertices.



1 mark

4 Niko and Jaye share this money **equally**.



How much money do they **each** get?

 p

1 mark