





## Extend

2 Here are the minibeasts that Alice found on her woodland hunt in the order that she found them.


a. Circle the second minibeast that Alice found.



b. Circle the last minibeast that Alice found.

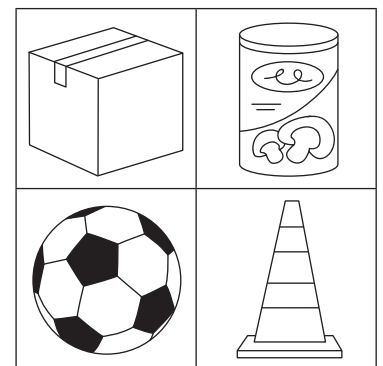


c. Circle the minibeast in the fourth position.



## Apply

3 Circle the name of the 3D shape that has been described by its position on the grid. Circle **one**.



**Tip**

For this question, think about pairs of words that describe opposite positions. For example: 'above' and 'below'.

a. The sphere is below this shape.

cube   cone   cylinder

b. The cylinder is above this shape.

cube   cone   cylinder

c. The cube is to the left of this shape.

cube   cone   cylinder